

Name _____


Class _____

Date _____

Progression: Medium

Equal Groups (B)

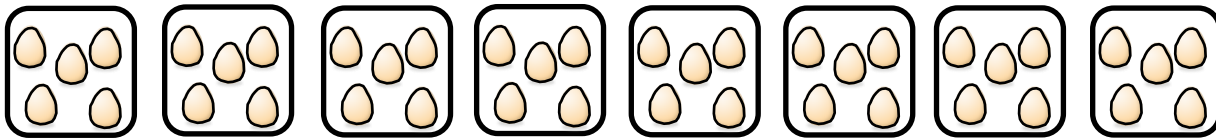
Fill in the missing gaps.



There are groups of stars. There are stars in total.




There are groups of bees. There are bees in total.



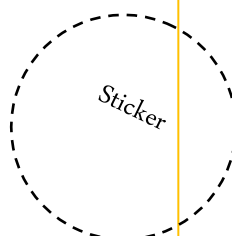
There are groups of eggs. There are eggs in total.



There are groups of bananas. There are bananas in total.



There are groups of apples. There are apples in total.



How confidently can you work out equal groups?



Not confident



Fairly confident



Very confident

Your Score
