

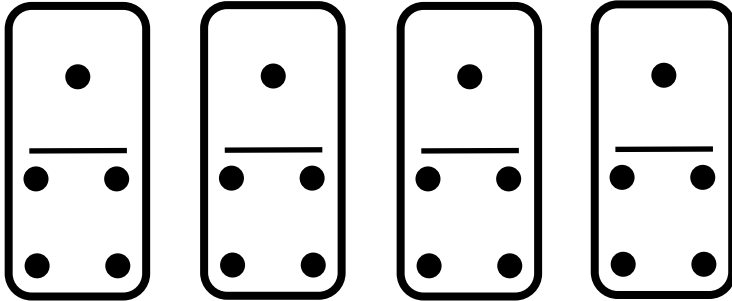
Name _____

Class _____


Date _____

Dominoes


Complete the multiplication sum to find the total number of dots on the dominoes.




$$4 \times \underline{\quad} = \square$$



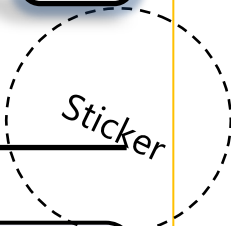
$$2 \times \underline{\quad} = \square$$



$$\underline{\quad} \times \underline{\quad} = \square$$



$$\underline{\quad} \times \underline{\quad} = \square$$



How confidently can you complete the multiplication using dominoes?



Not confident



Fairly confident



Very confident

Your _____ Score
