

Name \_\_\_\_\_

Class \_\_\_\_\_

Date \_\_\_\_\_

Progression: Easy

Year 5

## Matching Divisions (A)



Match the divisions for each bubble using a number on the fish.

Use a suitable method.

180


800

÷




360

120



150



1) 160

2) 400

3) 30

4) 120

5) 50

6) 72

7) 36

8) 200

Sticker

How confidently can you divide 3-digit numbers by a 1-digit number?



Not confident



Fairly confident



Very confident

Your Score

\_\_\_\_\_