

Name _____

Class _____

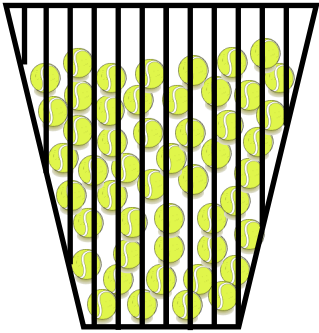
Date _____

Progression: Medium

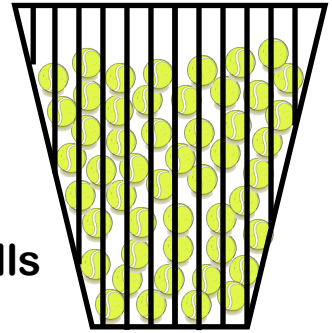
Year 6

Multiplying by 50

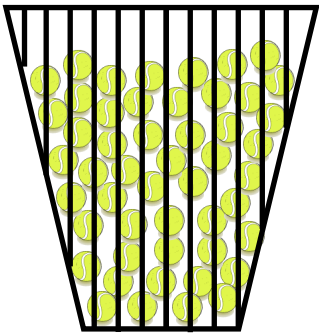
There are 50 tennis balls in each basket. Work out the total number of tennis balls in the number of baskets given.



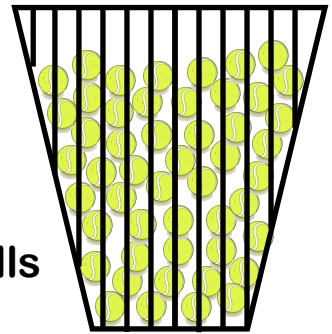
11 baskets balls



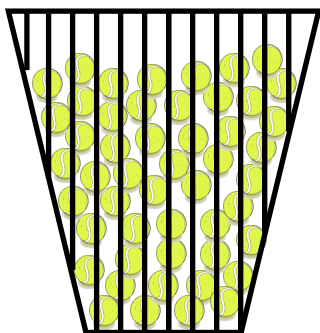
15 baskets balls



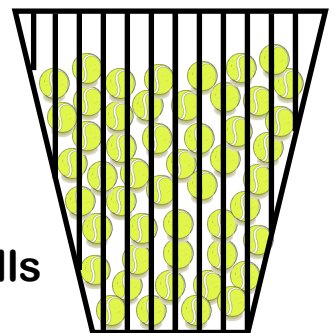
21 baskets balls



24 baskets balls



34 baskets balls



39 baskets balls

Sticker

How confidently can you multiply by 50?



Not confident



Fairly confident



Very confident

Your Score
