

Name _____

Class _____

Date _____


Progression: Medium

Year 2


Picture Division (B)



$12 \div 2 = \square$



$21 \div 3 = \square$




$40 \div 4 = \square$




$15 \div 5 = \square$



$18 \div 6 = \square$



$24 \div 2 = \square$



$18 \div 3 = \square$

Sticker

How confidently can you divide by 2, 3, 4, 5 and 6?



Not confident



Fairly confident



Very confident

Your Score
