

Name _____

Class _____

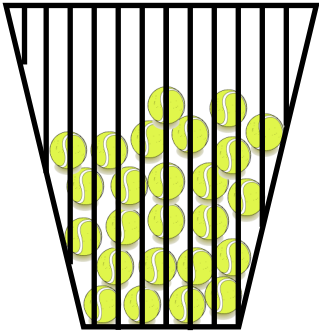
Date _____

Progression: Medium

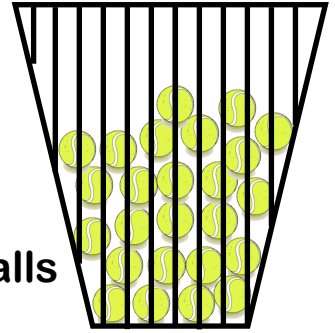
Year 6

Multiplying by 25

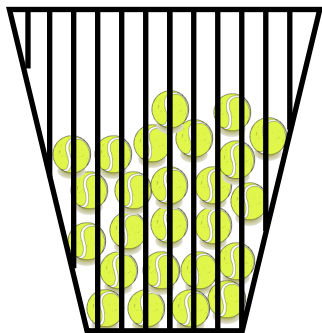
There are 25 tennis balls in each basket. Work out the total number of tennis balls in the number of baskets given.



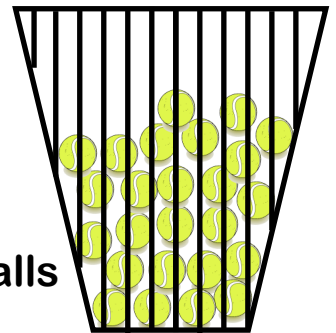
13 baskets balls



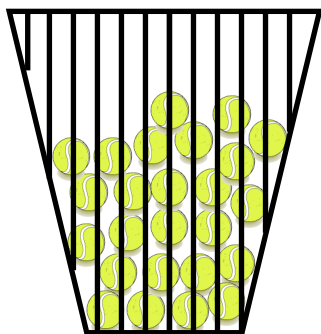
16 baskets balls



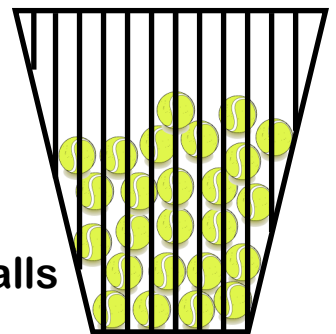
21 baskets balls



25 baskets balls



32 baskets balls



37 baskets balls

Sticker

How confidently can you multiply by 25?



Not confident



Fairly confident



Very confident

Your Score
